

MATH

LOGIC PROBLEMS

Find the value for each symbol.

$$\text{leaf} + \text{leaf} = 8$$

$$\text{flower} - 7 = \text{leaf}$$

$$\text{leaf} - \text{tiki} = 3$$

1

SHELLEY GRAY

Find the value for each symbol.

$$\text{apple} - \text{drink} = 5$$

$$\text{apple} + \text{apple} = 12$$

$$\text{crayon} + \text{drink} = 20$$

10

© Shelley Gray

GRADES
3-4

Ready to
challenge
your students in a new way?

These Logic Puzzles will require
your students to think differently,
providing a whole new element
of challenge!



Find the value for each symbol.

$$\text{Van} - \text{Flip Flop} = 8$$

$$\text{Flower} - \text{Van} = 3$$

$$\text{Flip Flop} + \text{Flip Flop} = 18$$

3

Find the value for each symbol.

$$\text{Detective} + \text{Detective} = 6$$

$$\text{Detective} + \text{Detective} = 20$$

$$\text{Detective} + \text{Glasses} = 18$$

Requires
critical
thinking!























































This set includes
20 logic puzzles

that focus on addition and
subtraction within 20.



But don't be fooled! These puzzles
are trickier than they look!

A recording sheet is included to
make student organization simple.




RECORDING SHEET (Addition and Subtraction Within 20)

1  =  =  =	2  =  =  =	3  =  =  =	4  =  =  =
5  =  =  =	6  =  =  =	7  =  =  =	
9  =  =  =	10  =  =  =	11  =  =  =	
13  =  =  =	14  =  =  =	15  =  =  =	16  =  =  =
17  =  =  =	18  =  =  =	19  =  =  =	20  =  =  =



Find the value for each symbol.



 +  = 10



$15 - \text{flower} = 11$

 +  = 

Find the value for each symbol.

 -  = 5

 +  = 12

 +  = 20

Ideas for Use



Morning Tubs



Math Centers



Early Finisher Activity



Around the Room Gallery Walk

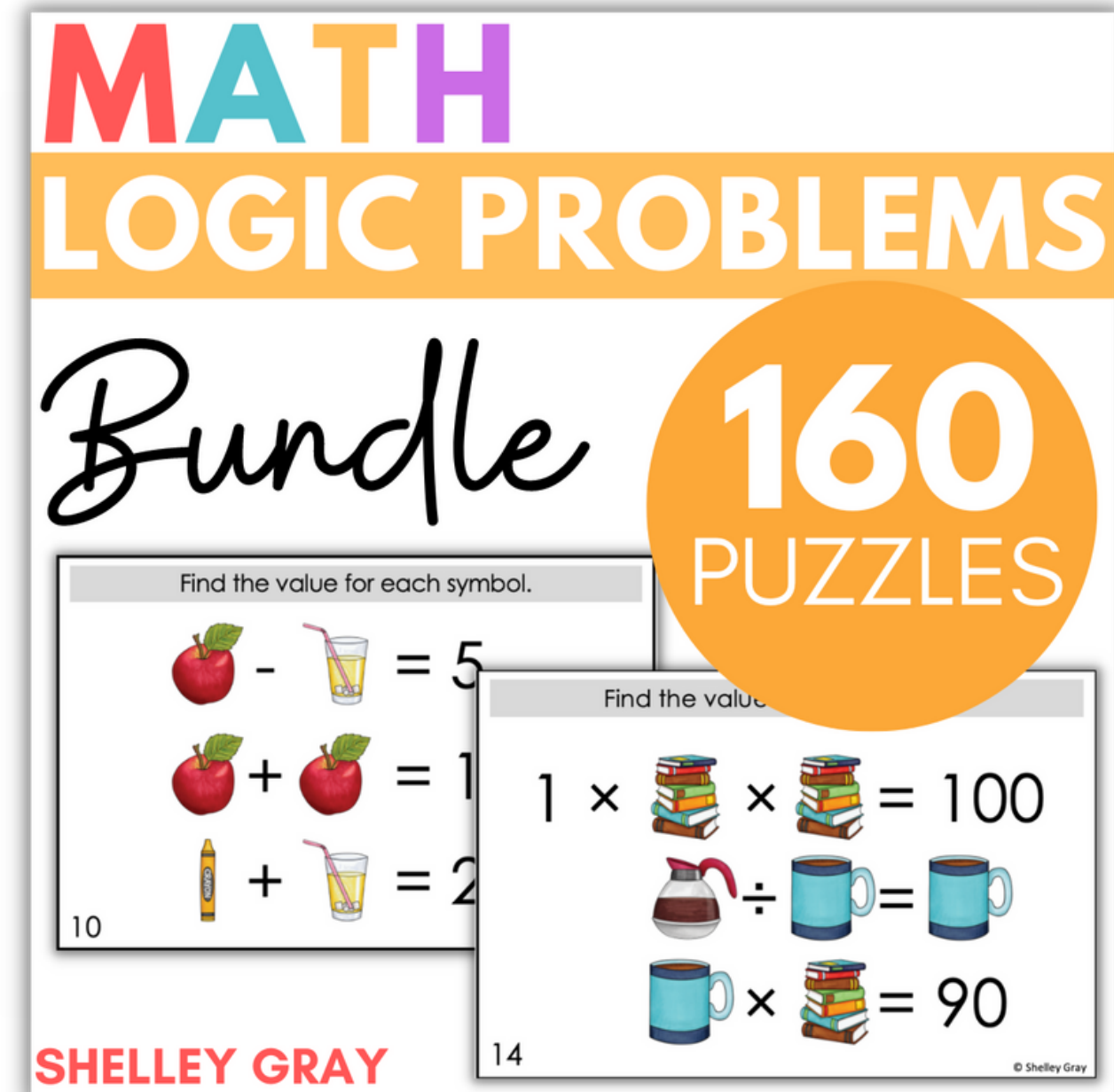
Tip:

Let your students work in partners and listen to the amazing math conversation that occurs!

Try using differentiated puzzles to provide a "just right" challenge for all your students.

This bundle includes 160 logic puzzles at 8 different levels!

Try letting students choose the set that challenges them perfectly to increase their metacognition and encourage them to take responsibility for their own learning!



Differentiate to all your students with the Logic Puzzle Bundle HERE.