


SUBTRACTION




SHELLEY GRAY

POTION SPLAT!


What do you need to subtract to get from one potion bottle to the next?




86




25




45




96




89



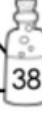
20




10




54




38




50



20



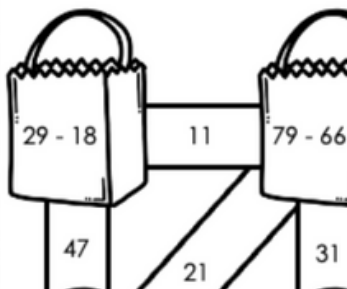
30



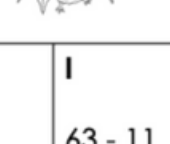
Which expressions equal 50?

56 - 6	78 - 28
100 - 45	78 - 28
73 - 23	31 - 19

TRICK OR TREAT!




HALLOWEEN RIDDLES



Find the differences to solve the riddle.

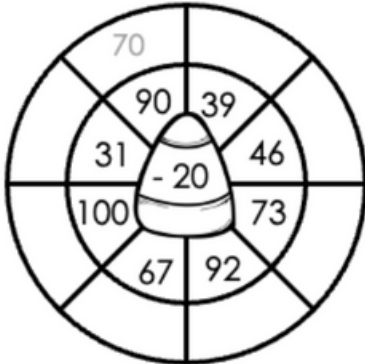
K $100 - 13$	I $63 - 11$	L $95 - 17$
E $86 - 19$	A $78 - 15$	R $68 - 12$

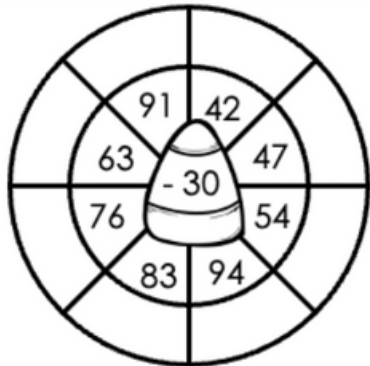


Where do ghosts go on vacation?

$\overline{78} \quad \overline{63} \quad \overline{87} \quad \overline{67} \quad \overline{67} \quad \overline{56} \quad \overline{52} \quad \overline{67}$

Subtract to complete the candy corn wheels.





©Shelley Gray
www.ShelleyGrayTeaching.com

TRICK OR TREAT!

Subtraction

70
90 39
31 - 20 46
100 73
67 92

©Shelley Gray

25

29 - 18 11 79 - 66 13

47 21 31 85

47 - 26 58 89 - 31 10 88 - 36 13 74 - 45

73 45 32 8 52 72 53

92 - 47 17 80 - 63 16 96 - 24 100 80 - 27

54 37 34 14 34 98 17

START 22 64 - 30 94 62 - 36 26 66 - 49

©Shelley Gray www.ShelleyGrayTeaching.com

10 fun activities to practice double digit subtraction



SPOOKY SKIP-COUNTING

Skip count backwards by 10's.

100

Skip count backwards by 5's.

50

Skip count backwards by 2's.

20

Fill in the blank to make the sides equal.

$100 - 10 = 95 - \underline{\hspace{1cm}}$	43 -
$90 - 15 = 100 - \underline{\hspace{1cm}}$	20 -
$56 - 10 = 50 - \underline{\hspace{1cm}}$	36 -
$15 - 8 = 86 - \underline{\hspace{1cm}}$	42 -
$50 - 12 = 48 - \underline{\hspace{1cm}}$	10 -

©Shelley Gray

SPOOKY SUBTRACTION

Subtract the smaller number from the bigger number to complete the subtraction funnels.

Example

64 32 82

89 41 16

97 88 47

77 12 23

SPOOKY DWELLING

Shade each part of the picture according to the difference.

51-60: Orange	41-50: Yellow	31-40: Blue
21-30: Grey	11-20: Brown	0-10: Black

97 - 62 75 - 39 81 - 44 89 - 56

27 - 13

40 - 31

34 - 31

95 - 79

79 - 32

89 - 65

63 - 35

56 - 30

www.ShelleyGrayTeaching.com

COSTUME CUT AND PASTE

Subtract. Paste each subtraction expression inside the correct box.

Differences with 1 in the tens place.

Differences with 3 in the ones place.

Differences with 6 in the ones place.

Differences with 9 in the ones place.

$52 - 41 =$	$94 - 45 =$	$89 - 40 =$
$68 - 15 =$	$55 - 16 =$	$70 - 39 =$

Subtract the smaller number from the bigger number. If the difference is even, shade the candy green. If the difference is odd, shade the candy orange.

45 30 25 8 33 19 55 88 22 90

www.ShelleyGrayTeaching.com

EN SOLVING

Between party 27 minutes from home and decided to walk through the park. It took her 13 minutes to walk through the park. How long did she walk on the street?

For each student in the class, plus one for the teacher. There were 26 cupcakes in all. 9 students are absent today. How many cupcakes did the teacher eat?

Skylar is building a skeleton. In all there are 75 pieces to assemble. So far she has put 25 together. How many more pieces does she have to add to the skeleton?

Megan is watching a 90-minute scary Halloween movie. After 47 minutes, she says, "This is way too scary!" and turns it off. How much of the movie did she miss?

Lora brought home 89 pieces of chocolate from trick or treating. But her younger brother snuck into her room and ate 31 pieces! How many pieces of chocolate does she have left?

Use the pages as
stand-alone
activities, or use
the provided
cover page to
create student
booklets.



Activities Include:

- Riddle
- Halloween maze
- Color by difference
- Skip-counting
- Cut and paste
- Problem-solving
- and more!

TRICK OR TREAT! Subtract to get from start to finish.

START 38 - 16

END

©Shelley Gray

HALLOWEEN RIDDLES Find the differences to solve the riddle.

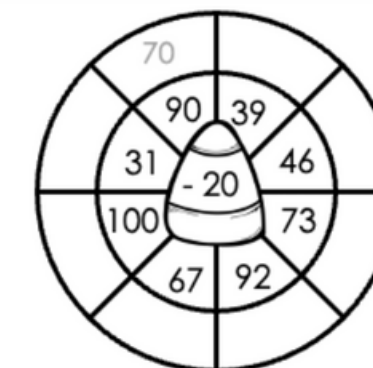
K	I	L
100 - 13	63 - 11	95 - 17
E	A	R
86 - 19	78 - 15	68 - 12



Where do ghosts go on vacation?

78 63 8

Subtract to complete the candy



POTION SPLAT! What do you need to subtract to get from one potion bottle to the next?

86 25 45 96 89 20 10 54 38 50 20 30