



**This Christmas
Bundle includes fun, festive, and rigorous
resources to keep your students begging
for more this December!**

SANTA'S WORKSHOP MATH PROJECT



LETTERS TO SANTA
Each day, a bag of letters is delivered to the North Pole from children around the world. Look at the letters that were delivered this week.

NUMBER OF LETTERS DELIVERED THIS WEEK

| | | | | | |
|-----|--|--|--|--|--|
| 100 | | | | | |
| 90 | | | | | |
| 80 | | | | | |
| 70 | | | | | |
| 60 | | | | | |
| 50 | | | | | |
| 40 | | | | | |
| 30 | | | | | |
| 20 | | | | | |
| 10 | | | | | |
| 0 | | | | | |

SUN MON TUE WED THURS FRI

DECORATING THE WORKSHOP
It's workshop decorating day! The base ten blocks represent the number of each decoration in the workshop.

DECORATING THE TREE
It's time to decorate the tree in Santa's Workshop! Each of the pictures below represents 2 items. How many decorations are there?

Write the number of each decoration:

| Decoration | How many? | Word Form | Total |
|------------|-----------|-----------|-------|
| | | | |
| | | | |
| | | | |
| | | | |

BEST SUITED TO GRADES 2-3

SHELLEY GRAY

LETTERS TO SANTA
Each day, a bag of letters is delivered to the North Pole from children around the world. Look at the letters that were delivered this week.

NUMBER OF LETTERS DELIVERED THIS WEEK

| | | | | | |
|-----|--|--|--|--|--|
| 100 | | | | | |
| 90 | | | | | |
| 80 | | | | | |
| 70 | | | | | |
| 60 | | | | | |
| 50 | | | | | |
| 40 | | | | | |
| 30 | | | | | |
| 20 | | | | | |
| 10 | | | | | |
| 0 | | | | | |

SUN MON TUE WED THURS FRI

Use the graph to answer the questions.

- How many letters were delivered on Monday?
- How many more letters were delivered on Friday than on Tuesday?

DECORATING THE TREE
It's time to decorate the tree in Santa's Workshop! Each of the pictures below represents 2 items. How many decorations are there?

COUNTING THE TOYS
Each array represents the number of toys. How many are there?

How many? Write a number sentence.

| | |
|--|--|
| | |
| | |
| | |

ELF JOKES
The elves at Santa's Workshop love to laugh and tell funny jokes.

| | | | |
|-------|-------|--------|-------|
| A: 75 | H: 40 | O: 35 | V: 80 |
| B: 60 | I: 90 | P: 88 | W: 15 |
| C: 10 | J: 54 | Q: 51 | X: 33 |
| D: 32 | K: 72 | R: 100 | Y: 70 |
| E: 65 | L: 25 | S: 22 | Z: 31 |
| F: 48 | M: 95 | T: 50 | |
| G: 86 | N: 67 | U: 18 | |

What did one snowman say to the other snowman?

$20-12$ $15+20$ $50+20$ $20-5$ $9+9$ $14+1$ $85+10$ $50+5$ $18+7$ $20-5$

$5+5$ $50+25$ $50+50$ $80+20$ $12+23$ $25+25$ $12+10$?

DECORATING THE WORKSHOP
It's workshop decorating day! The base ten blocks represent the number of each decoration in the workshop.

CANDY CANES

BELLS

LIGHTS

BOWS

Write the number of each decoration:

| | IN WORD FORM | AS AN ADDITION SENTENCE | AS A SUBTRACTION SENTENCE |
|--|--------------|-------------------------|---------------------------|
| | | | |
| | | | |
| | | | |
| | | | |

THE NICE LIST
Santa has looked through the Nice List and decided what each child will receive. Use the clues to figure it out.

| | Skateboard | Reading Lamp | Toy Tow Truck | Skipping Rope | Invisible Ink Pen |
|---------|------------|--------------|---------------|---------------|-------------------|
| Alex | | | | | |
| Jenna | | | | | |
| Andre | | | | | |
| Cecile | | | | | |
| Melissa | | | | | |

- Melissa does not like skateboarding.
- Andre has asked Santa for a reading lamp or an invisible ink pen.
- Cecile loves to read and has asked Santa for both a reading lamp and an invisible ink pen.
- Alex has a skate park near his house and will be getting a skateboard.

NORTH POLE PROBLEMS
Santa does a 45 minute practice run to make sure his sleigh flies well. If he begins flying at 6:20 pm, at what time will he finish?

START END

Santa needs 25 carrots to feed the reindeer before flying on Christmas Eve. There are 10 carrots in each package. How many packages of carrots will he need?

$12-10$ $80+10$ $2+8$

Christmas time?

$5+4$ $20+20$ $60+40$ $50+40$ $20+2$ $35+5$ $75+20$ $20+55$ $12+10$

! 5

looked up in the sky?

$70+20$ $40+32$ $4+24$ $20+80$ $40+35$ $70+20$ $40+27$

Christmas Math Project

Christmas Math has never been so much fun! This Christmas Math Project will keep your students engaged and begging for more throughout the month of December, as they complete relevant, meaningful, and FUN tasks using **addition, subtraction, graphing and data interpretation, time, logic, and so much more!**



CHRISTMAS GALLERY WALK

Christmas Gallery Walk

A gallery walk is a fun way to get your students **up and moving** around the classroom. Simply post the gallery walk cards around the classroom, give your students the recording sheets and clipboards (or another hard surface to write on), and have them circulate the room, completing the tasks as they go!

Get your students up and moving around the room!

SHELLEY GRAY

Would you rather give a gift, or get a gift? Why?



What do you think would be the hardest part of being one of Santa's elves?



Card #16

Make a list of three things that you will do for others during this holiday season.

If you could invent your own flavor of candy cane, what would it be?



Card #

What is the most important thing you can do to prepare for winter?



Card #

Would you rather live in a cold, snowy climate or a warm climate for Christmas? Why?



Card #4

Would you rather give a gift, or get a gift? Why?

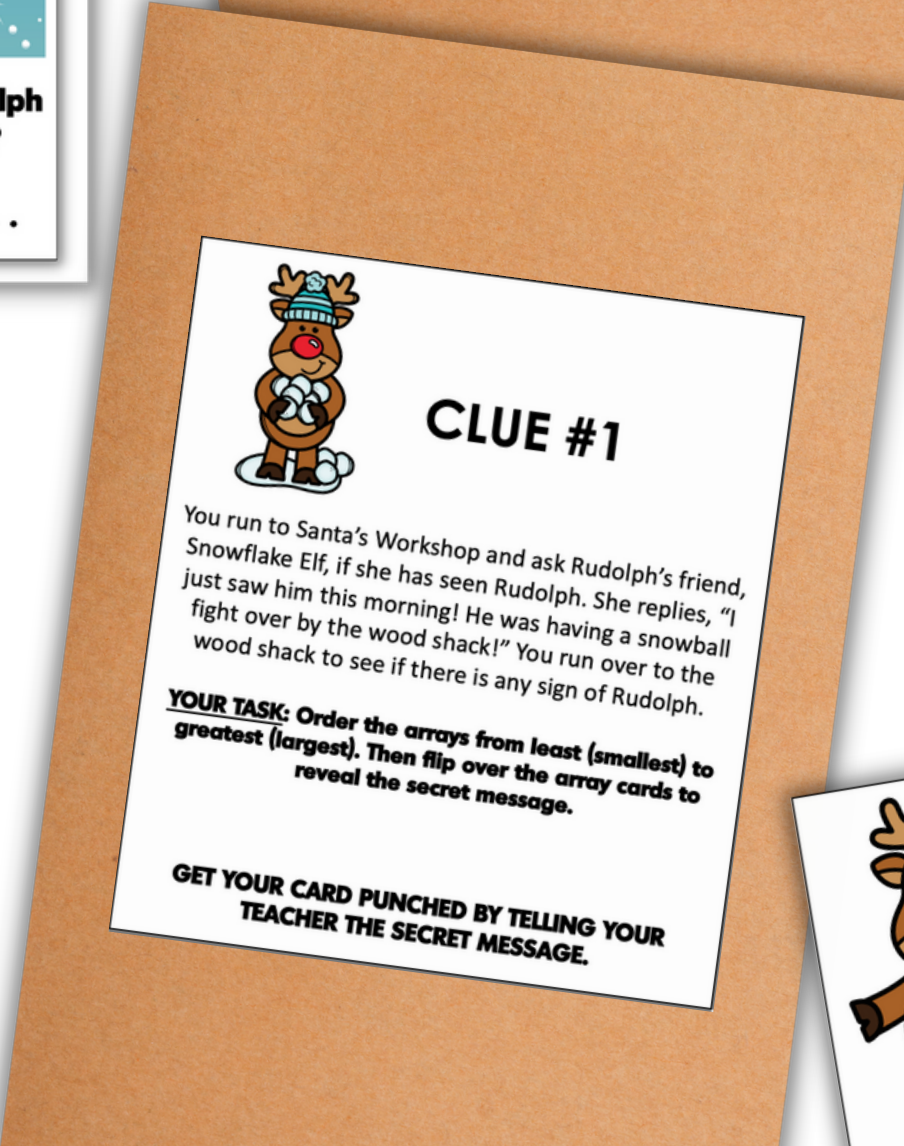
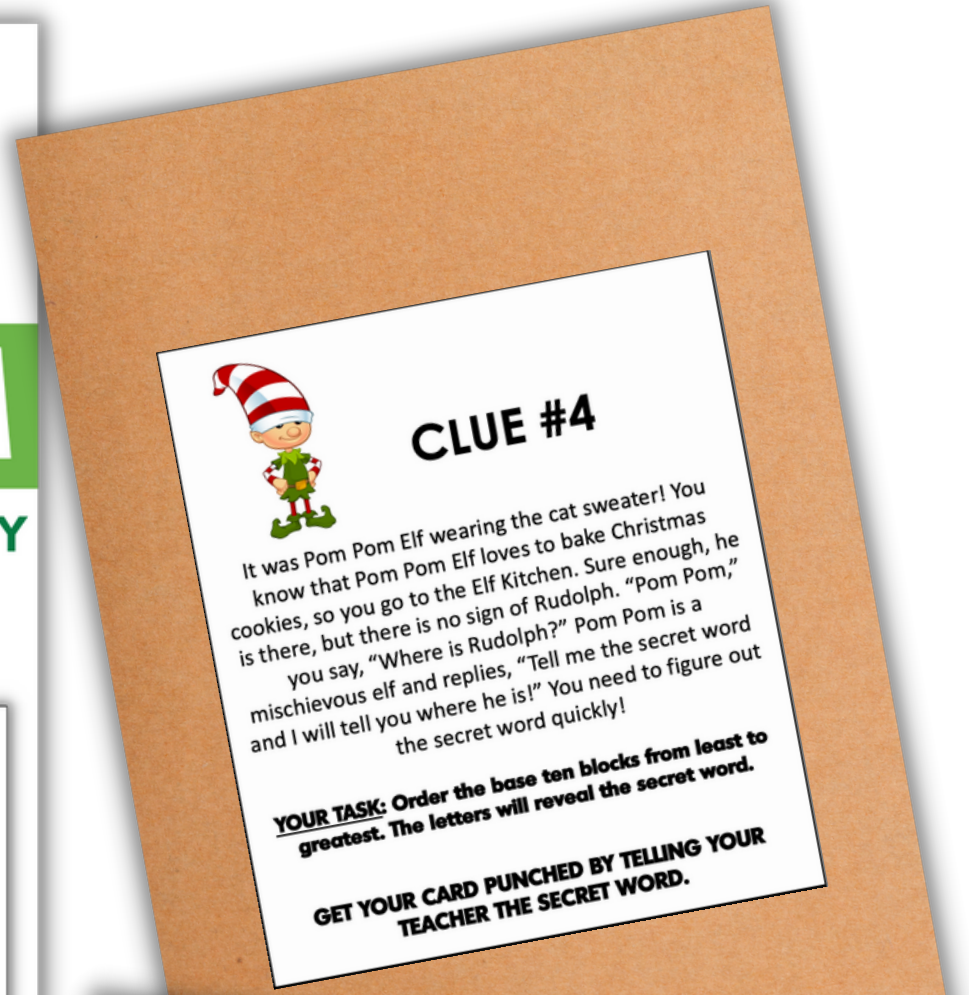


Card #23

WHERE'S RUDOLPH? ESCAPE ROOM

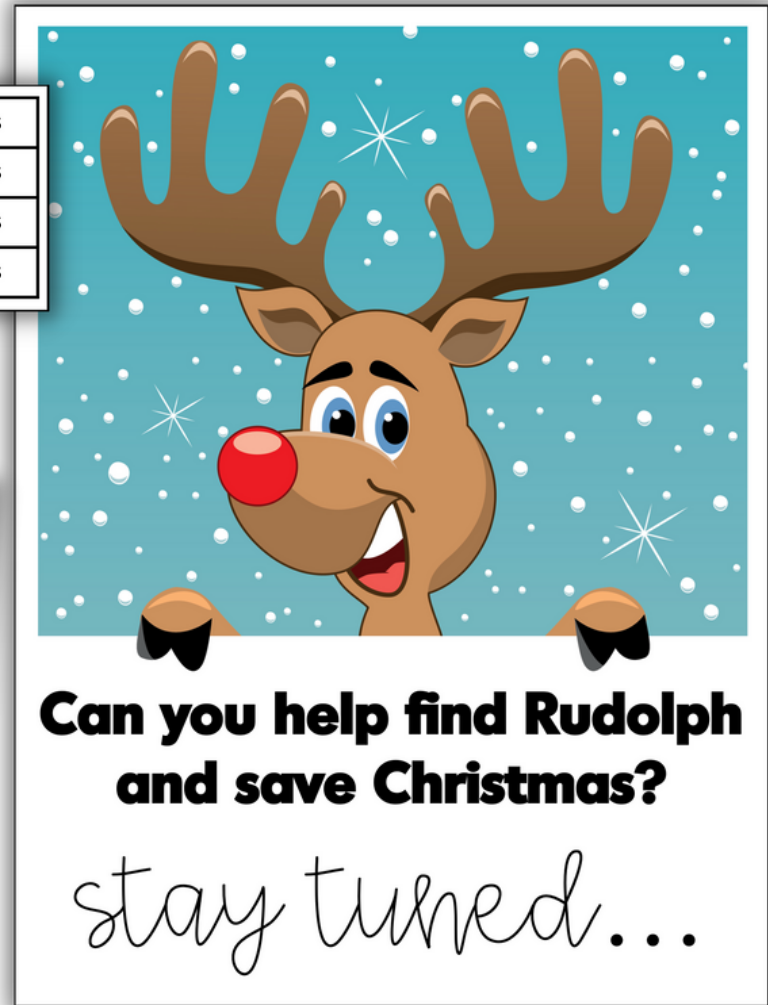



SHELLEY GRAY



Christmas Escape Room

Oh no! It's Christmas Eve and Rudolph is missing! This can't be! Without Rudolph, the sleigh cannot fly and Christmas will be ruined! Can you help find him? Your students will work together as a team, cracking codes and solving clues as they go. This is a **high-energy, high-engagement** activity that will encourage **teamwork** and **cooperation**.



Ready to **simplify**
and take your
Christmas math **to**
the next level this
year?



CHRISTMAS BUNDLE

LETTERS TO SANTA
Each day, a bag of letters is delivered to the North Pole from children around the world. Look at the letters that were delivered this week.

| NUMBER OF LETTERS DELIVERED THIS WEEK | |
|---------------------------------------|-----|
| 100 | |
| 90 | |
| 80 | |
| 70 | |
| 60 | |
| 50 | |
| 40 | |
| 30 | |
| 20 | |
| 10 | |
| 0 | |
| SUN | MON |

DECORATING THE WORKS
It's workshop decorating day! The base ten blocks represent of each decoration in the workshop.

DECORATING THE
It's time to decorate the tree in Santa's Workshop below represents 2 items. How many decorations?

Card #13
If you could invent your own flavor of candy cane, what would it be?

Card #9
If this reindeer could talk, what would he say?

BEST SUITED TO GRADES 2-3

SHELLEY GRAY