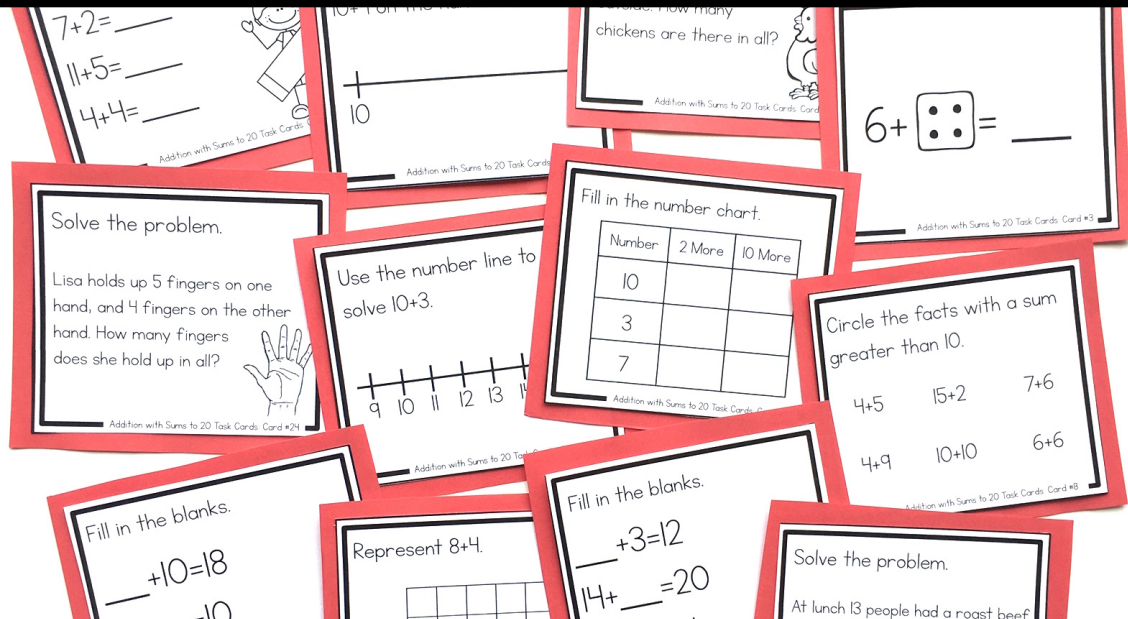


# ADDITION WITH SUMS TO 20

## Task Cards

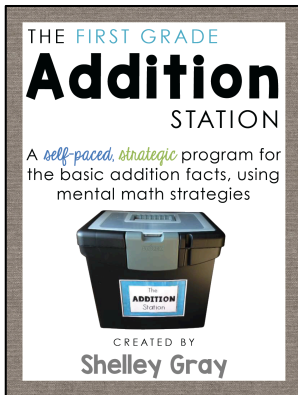


# About this Resource

This resource includes 24 task cards to reinforce addition with sums to 20. Students will use these task cards to practice this concept in a variety of different ways, including dot patterns, ten frames, missing addends, number lines, problem-solving, and more.

For more information on the counting on strategy for addition, please refer to this post on my website:

[www.ShelleyGrayTeaching.com/effective-strategies-for-teaching-addition-facts](http://www.ShelleyGrayTeaching.com/effective-strategies-for-teaching-addition-facts)



Are you looking for even more support with teaching addition strategies in your classroom? The Addition Station will transform your teaching, allowing your students to master addition facts and strategies at their own pace. Find the Addition Station here:

<https://www.teacherspayteachers.com/Product/The-Addition-Station-First-Grade-1781284>









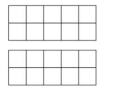









I'd love to help you get really strategic with your math instruction this year! Join me over on my website, [ShelleyGrayTeaching.com](http://ShelleyGrayTeaching.com) for ideas, tips, and resources!

<http://shelleygrayteaching.com/>




# This resource includes...



Twenty-four task cards to practice addition to 20 in a variety of different ways:

<p>Eight more than 9 is ____.</p> <p><small>Addition with Sums to 20 Task Cards Card #1</small></p>	<p>Solve the problem.</p> <p>There are 9 scoops of vanilla ice cream left and 5 scoops of chocolate. How many scoops of ice cream are left altogether?</p>  <p><small>Addition with Sums to 20 Task Cards Card #2</small></p>	<p>Fill in the blanks.</p> <p>____ + 10 = 18 5 + ____ = 10 ____ + 3 = 16</p>  <p><small>Addition with Sums to 20 Task Cards Card #3</small></p>	<p>Circle the facts with a sum greater than 10.</p> <p>4+5    15+2    7+6 4+9    10+10    6+6</p> <p><small>Addition with Sums to 20 Task Cards Card #4</small></p>	<p>Circle the facts with a sum greater than 15.</p> <p>10+6    8+3    5+2 6+6    14+4    13+4</p> <p><small>Addition with Sums to 20 Task Cards Card #5</small></p>	<p>Solve the problem.</p> <p>Gillian and Jack are playing darts. They each threw 6 darts. How many did they throw altogether?</p>  <p><small>Addition with Sums to 20 Task Cards Card #6</small></p>	<p>Solve the problem.</p> <p>Today two groups of people go for a hot air balloon ride. There are 5 people in the first group, and 3 people in the second group. How many people went for rides altogether?</p>  <p><small>Addition with Sums to 20 Task Cards Card #7</small></p>	<p>Fill in the blanks.</p> <p>____ + 3 = 12 14 + ____ = 20 ____ + 7 = 14</p> <p><small>Addition with Sums to 20 Task Cards Card #8</small></p>												
<p>6 +  = ____</p> <p><small>Addition with Sums to 20 Task Cards Card #9</small></p>	<p>How could you represent 10+4 on the number line?</p> <p>10 _____</p> <p><small>Addition with Sums to 20 Task Cards Card #10</small></p>	<p>Solve the problem.</p> <p>At lunch 13 people had a roast beef sandwich, and 5 people had a ham sandwich. How many sandwiches were eaten in all?</p>  <p><small>Addition with Sums to 20 Task Cards Card #11</small></p>	<p>Fill in the number chart.</p> <table border="1" data-bbox="597 468 718 567"> <thead> <tr> <th>Number</th> <th>2 More</th> <th>10 More</th> </tr> </thead> <tbody> <tr> <td>10</td> <td></td> <td></td> </tr> <tr> <td>3</td> <td></td> <td></td> </tr> <tr> <td>7</td> <td></td> <td></td> </tr> </tbody> </table> <p><small>Addition with Sums to 20 Task Cards Card #12</small></p>	Number	2 More	10 More	10			3			7			<p>Solve:</p> <p>7+7=____ 11+4=____ 16+1=____</p>  <p><small>Addition with Sums to 20 Task Cards Card #13</small></p>	<p>Solve:</p> <p>5+2=____ 12+3=____ 10+10=____</p>  <p><small>Addition with Sums to 20 Task Cards Card #14</small></p>	<p>Represent 11+5.</p>  <p><small>Addition with Sums to 20 Task Cards Card #15</small></p>	<p>Use the number line to solve 10+3.</p>  <p><small>Addition with Sums to 20 Task Cards Card #16</small></p>
Number	2 More	10 More																	
10																			
3																			
7																			
<p>Solve the problem.</p> <p>12 of the chickens are inside the chicken coop. 7 chickens are outside. How many chickens are there in all?</p>  <p><small>Addition with Sums to 20 Task Cards Card #17</small></p>	<p>Solve:</p> <p>7+2=____ 11+5=____ 4+4=____</p>  <p><small>Addition with Sums to 20 Task Cards Card #18</small></p>	<p>Use the number line to solve 13+2.</p>  <p><small>Addition with Sums to 20 Task Cards Card #19</small></p>	<p>Represent 8+4</p>  <p><small>Addition with Sums to 20 Task Cards Card #20</small></p>	<p>Nine more than 9 is ____.</p> <p><small>Addition with Sums to 20 Task Cards Card #21</small></p>	<p>Solve the problem.</p> <p>Tony is grilling burgers. It takes 8 minutes to grill the first side, and 5 minutes to grill the second side. How long does it take to grill the burgers?</p>  <p><small>Addition with Sums to 20 Task Cards Card #22</small></p>	<p>Ten more than 4 is ____.</p> <p><small>Addition with Sums to 20 Task Cards Card #23</small></p>	<p>Solve the problem.</p> <p>Lisa holds up 5 fingers on one hand, and 4 fingers on the other hand. How many fingers does she hold up in all?</p>  <p><small>Addition with Sums to 20 Task Cards Card #24</small></p>												

Recording sheets to keep students organized.

Recording Sheet - Page 1	
1	2
Show your work:	Show your work:
Write an answer sentence:	Write an answer sentence:
3	4
_____ + _____ = _____	10 _____
5	6
Show your work:	7+2=____
Write an answer sentence:	11+5=____
	4+4=____
7	8
____ + 10 = 18	4+5    15+2    7+6
5+ ____ = 10	4+9    10+10    6+6
____ + 3 = 16	

Recording Sheet - Page 2	
9	10
Show your work:	Number    2 More    10 More
Write an answer sentence:	10
	3
	7
11	12
_____ + _____ = _____	
	
13	14
10+6    8+3    5+2	Show your work:
6+6    14+4    13+4	Write an answer sentence:
15	16
7+7=____	5+2=____
11+4=____	12+3=____
16+1=____	10+10=____

Recording Sheet - Page 3	
17	18
Show your work:	Show your work:
Write an answer sentence:	Write an answer sentence:
19	20
Show your work:	____ + 3 = 12
Write an answer sentence:	14 + ____ = 20
	____ + 7 = 14
21	22
	_____ + _____ = _____
	
23	24
Show your work:	Show your work:
Write an answer sentence:	Write an answer sentence:

# Answer keys to make self-checking a breeze!

Recording Sheet - Page 1	1	2
17	Show your work:	$9+5=14$
	Write an answer sentence:	Altogether, there are 14 scoops of ice cream left.
3	4	
$6+4=10$	Your answer might look different.	
5	6	
Show your work:	$12+7=19$	$7+2=9$
Write an answer sentence:	There are 19 chickens in all.	$11+5=16$
		$4+4=8$
7	8	
$8+10=18$	$4+5$	$15+2$
$5+5=10$	$7+6$	
$13+3=16$	$4+9$	$10+10$
	$6+6$	

ANSWER KEY	9	10
Show your work:	$13+5=18$	Number
Write an answer sentence:	8 sandwiches were eaten in all.	2 More
		10 More
11	12	
$13+2=15$		
13	14	
$10+6$	$8+3$	$5+2$
$6+6$	$14+4$	$13+4$
Show your work:	$6+6=12$	Write an answer sentence:
	They threw 12 darts altogether.	
15	16	
$7+7=14$	$5+2=7$	
$11+4=15$	$12+3=15$	
$16+1=17$	$10+10=20$	

ANSWER KEY	17	18
Show your work:	$8+5=13$	18
Write an answer sentence:	It takes 13 minutes to grill the burgers.	
19	20	
Show your work:	$5+3=8$	$9+3=12$
Write an answer sentence:	Altogether, 8 people went for hot air balloon rides.	$14+6=20$
		$7+7=14$
21	22	
$11+5=16$	$10+3=13$	
23	24	
14	Show your work:	$5+4=9$
	Write an answer sentence:	She holds up 9 fingers in all.