


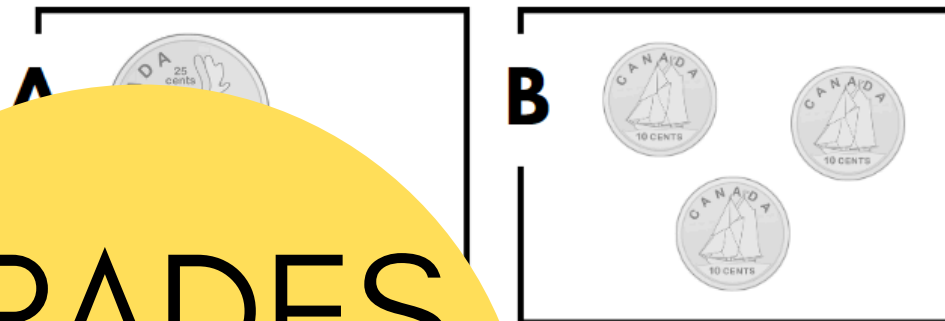
WORKING WITH MONEY

INCLUDES 3 VERSIONS
USA currency
CANADIAN currency
GENERIC currency


GALLERY WALK

SHELLEY GRAY

7 What is the difference in cents between A and B?



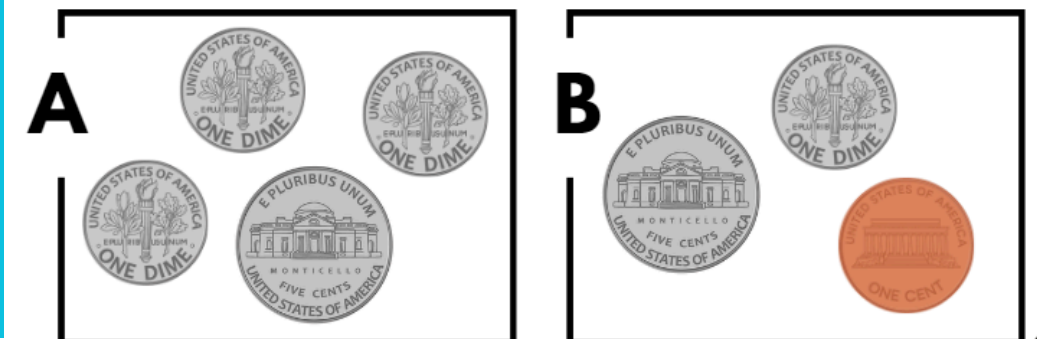
9 What is the total value of the money below?



How many bills and coins would you need to make the same amount using a different combination of bills or coins.



4 What is the difference in cents between A and B?



GRADES
2-4

Gallery Walk

© Shelley Gray

Working with Money Gallery Walk

© Shelley Gray

Looking for a simple, fun way to reinforce essential money skills?

5

**Draw coins to make
the amount
35 cents**

usi
thr

Working with Money Gallery Walk

2

**Make the amount below
using two different
combinations of coins:**

7

**What is the difference in
cents between A and B?**



Working with Money Gallery Walk

© Shelley Gray

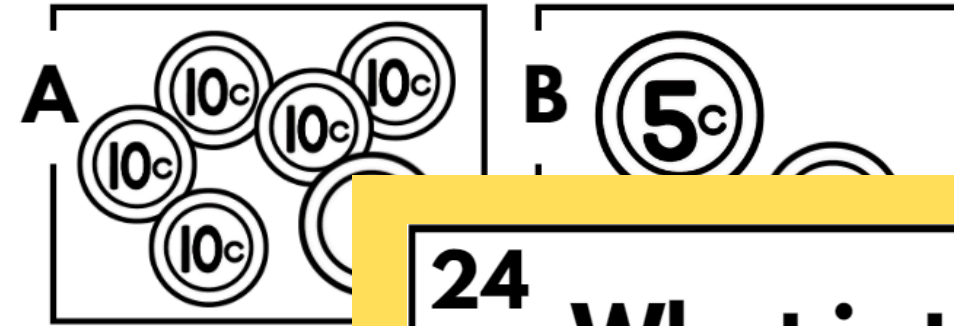


© Shelley Gray

This gallery walk includes 75 cards in three levels for each of three currencies: up to \$1.00, up to \$10.00, and up to \$50.00. Simply post them around your classroom and have students circulate, answering the questions as they go.

12


What is the difference in cents between A and B?



Working with Money Gallery Walk

24

What is the difference between A and B?



© Shelley Gray

20

Solve the problem:

The total value of Jack's eight coins is \$2.00. Each coin is the same. Are his coins quarters, dimes or nickels?



Working with Money Gallery Walk

© Shelley Gray

A recording sheet is included to help your students stay organized.

Working with Money Gallery Walk
RECORDING SHEET

Name: _____

CARD #1

CARD #2 #1

CARD #3 #2

CARD #4

CARD #5

CARD #6
a)
b)
c)
d)

CARD #7

CARD #8

Working with Money Gallery Walk
RECORDING SHEET

CARD #9
Total Value

Different Combination

CARD #10

CARD #11

CARD #12

CARD #13

CARD #14

Ready to integrate movement and learning into an activity your students will love?

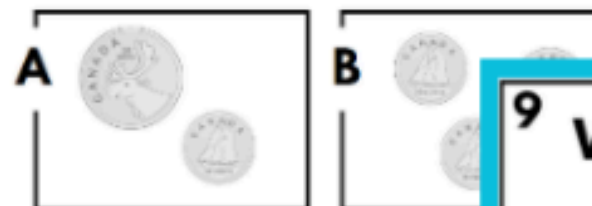
WORKING WITH MONEY

GALLERY WALK

Shelley Gray

INCLUDES 3 VERSIONS

7 What is the difference in cents between A and B?




USA currency
CANADIAN currency
GENERIC currency

9 What is the total value of the money below?



24 What is the difference in cents between A and B?



75
CARDS
for each
currency