


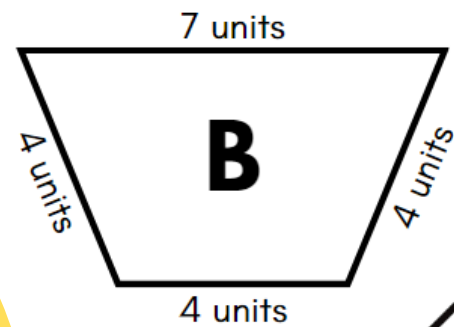
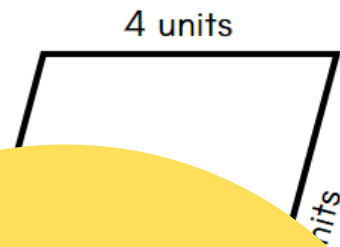
PERIMETER

GALLERY WALK

SHELLEY GRAY

13

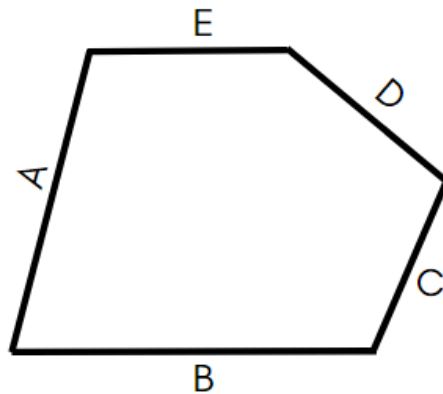
Which quadrilateral has the greatest perimeter? By how many units?



© Shelley Gray

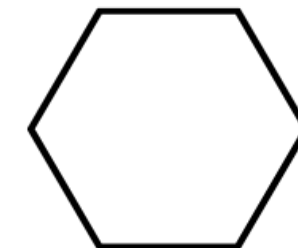
9

Side A is 6 units long. Side B is 2 units longer than Side A. Sides C, D and E are all 4 units long. What is the total perimeter of this polygon?



© Shelley Gray

The total perimeter of the hexagon below is 18 units. Each side is the same length. How many units long is each side?



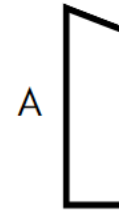
© Shelley Gray

GRADES
3-4

Looking for a simple, fun way to reinforce essential measurement skills?

5

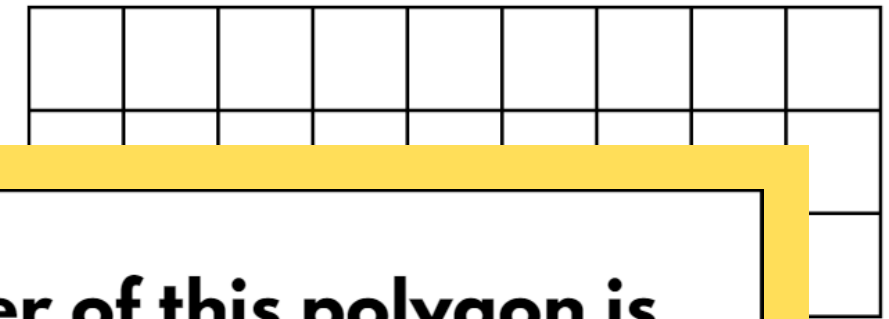
The total perimeter of this triangle is 17 units. What is the length of side A?



Perimeter Gallery Walk

8

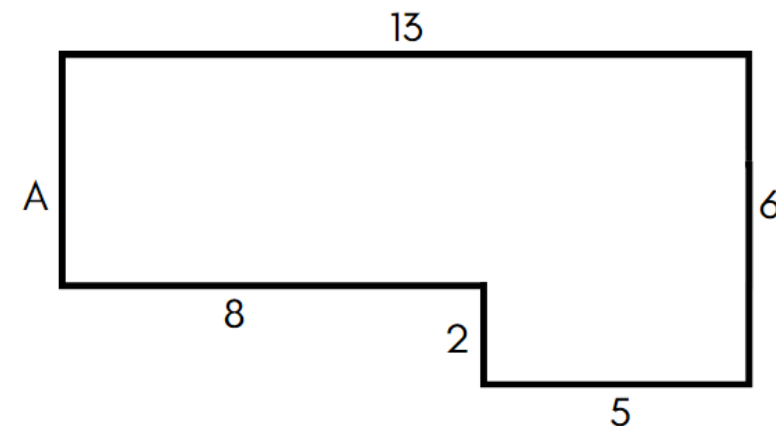
Each square measures 1 unit by 1 unit. What is the perimeter of this rectangle in units?



© Shelley Gray

12

The perimeter of this polygon is 38 units. What is the length of side A?



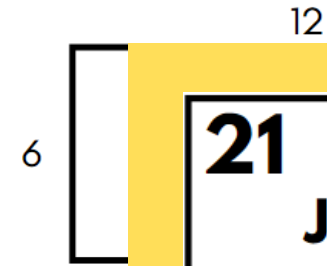
Perimeter Gallery Walk



© Shelley Gray

This gallery walk includes 25 cards with a variety of different prompts. Simply post them around your classroom and have students circulate, answering the questions as they go.

16 John is building a fence around his backyard. First, he must calculate the perimeter of the yard. Look at the diagram below. What is the perimeter of John's yard?



Perimeter Gallery Walk

21 Jackson is building a fence around his garden (see the diagram below). For every 2 units of length, he will need 1 fence post. How many fence posts does he need altogether?



23 The total perimeter of a pentagon-shaped table is 35 units. Each side is the same length. How long is each side of the table?

Perimeter Gallery Walk



© Shelley Gray



© Shelley Gray

A recording sheet is included to help your students stay organized.

Perimeter Gallery Walk
RECORDING SHEET

Name: _____

CARD #1	CARD #3
CARD #2	CARD #4
CARD #5	CARD #6
CARD #7	
CARD #9	

Perimeter Gallery Walk
RECORDING SHEET

CARD #11	
CARD #12	CARD #13
CARD #14	CARD #15
CARD #16	

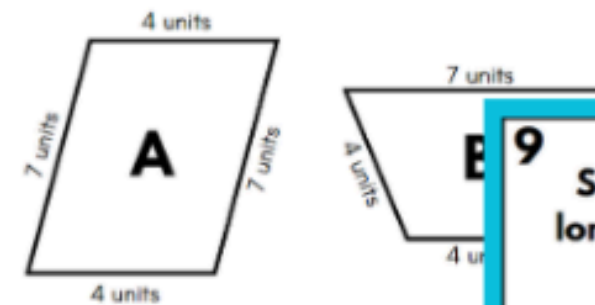
Ready to integrate movement and learning into an activity your students will love?

PERIMETER

GALLERY WALK

Shelley Gray

13 Which quadrilateral has the greatest perimeter? By how many units?



9 Side A is 6 units long. Side B is 2 units longer than Side A. Sides C, D and E are all 4 units long. What is the total perimeter of this polygon?



4 The total perimeter of the hexagon below is 18 units. Each side is the same length. How many units long is each side?



25
CARDS