

NUMBER SENSE

GALLERY WALK

SHELLEY GRAY

13

Fill in the spaces with a greater than or less than symbol:

$120 + 52 \quad \underline{\hspace{1cm}} \quad 100 + 108$

$\underline{\hspace{1cm}} \quad 200 + 30$

$50 + 100 + 300$



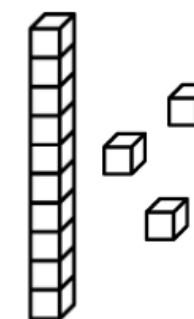
6

Solve the story problem below:

Shelley counts the number of cars that pass on the highway. He counts 13 blue cars, 28 white cars, and 10 red cars. How many cars does he see altogether?



What number do these base 10 blocks represent?



GRADES
2-4

Looking for a simple, fun way to reinforce essential number sense skills?

1

**Represent the number
47 in three different**

Number Sense Gallery Walk

5

**Write the following
three numbers in words:**

▪ 74


88

14

**Write three even
numbers that are
greater than 100 but
less than 120.**

Number Sense Gallery Walk

© Shelley Gray



This gallery walk includes 75 cards in three different levels: numbers 1-20, 1-100, and 1-1000. Simply post them around your classroom and have students circulate, answering the questions as they go.

9

Draw a picture that represents this equation:

500

Number Sense Gallery Walk

15

If vowels = 5 and consonants = 10, what is the value of your

23

Use the numbers below to make two equations that equal 15.

You can use addition or subtraction.

12

2

5

3

20

14

18

Number Sense Gallery Walk

© Shelley Gray



© Shelley Gray



A recording sheet is included to help your students stay organized.

Number Sense Gallery Walk
RECORDING SHEET

Name: _____

CARD # _____

CARD # _____

CARD # _____

CARD # _____

CARD # _____

CARD # _____

Number Sense Gallery Walk
RECORDING SHEET

CARD # _____

CARD # _____

CARD # _____

CARD # _____

CARD # _____

Ready to integrate movement and learning into an activity your students will love?

NUMBER SENSE

GALLERY WALK

Shelley Gray

13

Fill in the spaces with a greater than or less than symbol:

$$120 + 52 \text{ ___ } 100 + 100$$

$$250 - 25 \text{ ___ } 200$$

$$500 \text{ ___ } 200 + 100$$

Number Sense Gallery Walk

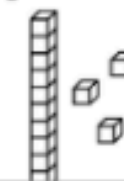
6

Solve the story problem below:

Daniel counts the number of cars that he sees on the highway. He counts 13 blue cars, 28 white cars, and 10 red cars. How many cars does he see altogether?

4

What number do these base 10 blocks represent?



75
CARDS