

MATH

LOGIC PROBLEMS

Find the value for each symbol.

$$1 \times \text{stack of books} \times \text{stack of books} = 10$$
$$\text{coffee pot} \div \text{mug} = \text{mug}$$
$$\text{mug} \times \text{stack of books} = 90$$

14

Find the value for each symbol.

$$\text{heart} \times \text{orange square} = 48$$
$$\text{orange square} \times \text{orange square} = \text{green L-shape}$$
$$72 \div \text{green L-shape} = 2$$

4

GRADES
4-6

© Shelley

Ready to
challenge
your students in a new way?

These Logic Puzzles will require
your students to think differently,
providing a whole new element
of challenge!



Find the value for each symbol.

$$64 \div \text{doghouse} = \text{doghouse}$$
$$16 \div \text{dog} = \text{dog}$$
$$\text{dog} \times \text{doghouse} \times \text{doghouse} = 96$$

19

Find the value for each symbol.

$$\text{joystick} \div 5 = \text{camera}$$
$$\text{joystick} \times \text{camera} = 81$$
$$\text{joystick} = 2$$























































This set includes

20 logic puzzles



that focus on multiplication and division.




But don't be fooled! These puzzles are trickier than they look!

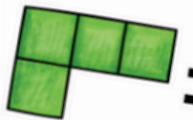
A recording sheet is included to make student organization simple.

RECORDING SHEET (Multiplication and Division)			
1  =  =  =	2  =  =  =	3  =  =  =	4  =  =
5  =  =  =	6  =  =  =	7  =  =  =	
9  =  =  =	10  =  =  =	11  =  =  =	 =
13  =  =  =	14  =  =  =	15  =  =  =	16  =  =  =
17  =  =  =	18  =  =  =	19  =  =  =	20  =  =  =

Find the value for each symbol.

 \times  = 48

 \times  = 

72 \div  = 2

4

Ideas for Use



Morning Tubs



Math Centers



Early Finisher Activity



Around the Room Gallery Walk

Tip:

Let your students work in partners and listen to the amazing math conversation that occurs!

Find the value for each symbol.

$$\text{cupcake} \div \text{chair} = 7$$

$$\text{coffee} \times \text{chair} = 30$$

$$\text{chair} \times \text{chair} = 100$$

3

© Shelley Gray

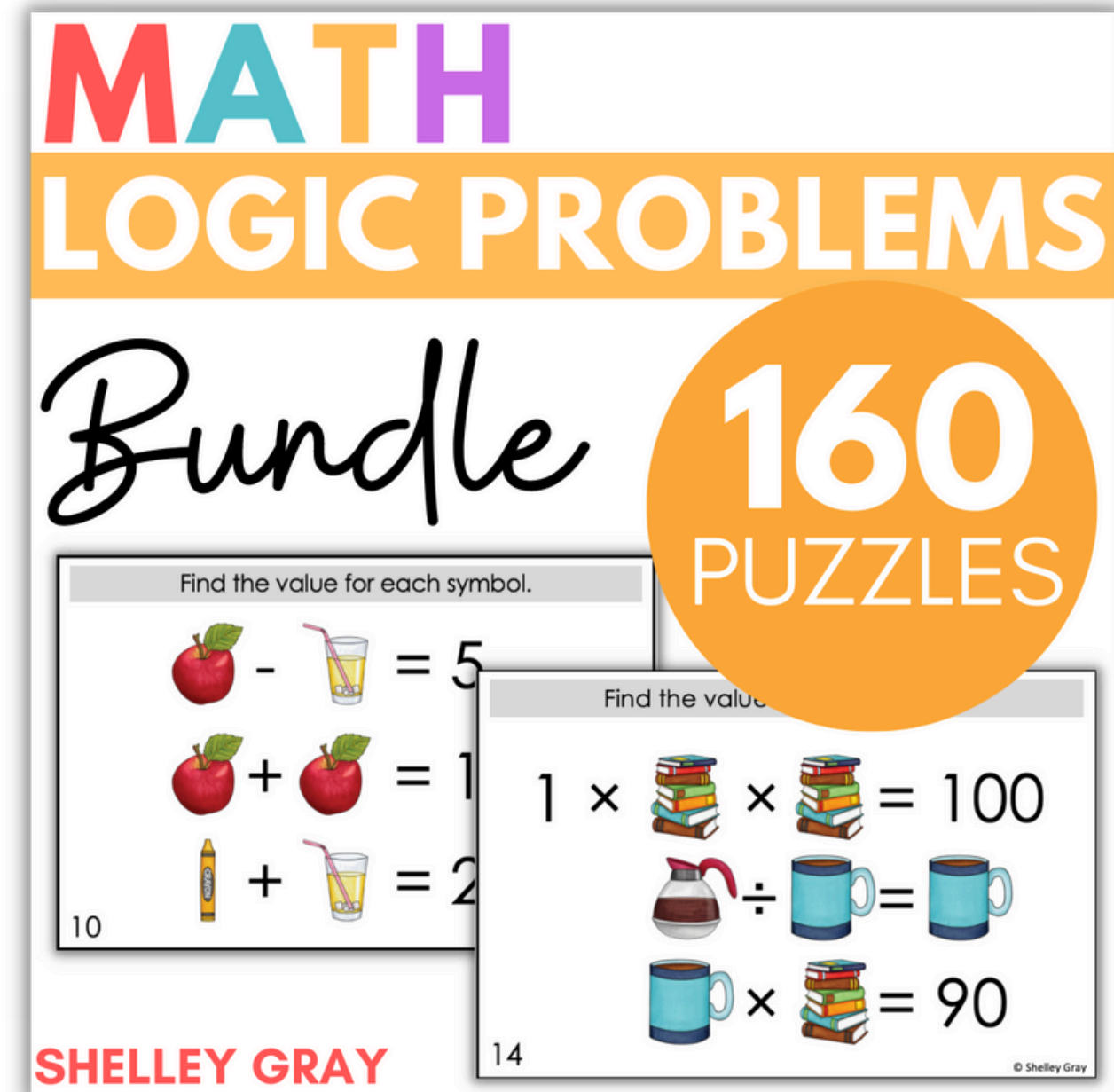
Along with the printable version, this resource also includes a Google Slides version – perfect for projecting in your classroom.

Use it as a math warm-up, daily challenge, or thinking task to promote deep and critical thinking.

Try using differentiated puzzles to provide a "just right" challenge for all your students.

This bundle includes 160 logic puzzles at 8 different levels!

Try letting students choose the set that challenges them perfectly to increase their metacognition and encourage them to take responsibility for their own learning!



Differentiate to all your students with the Logic Puzzle Bundle HERE.