

# MORE OR LESS

GRADES 1-4

*Bundle*

# GALLERY WALK

SHELLEY GRAY

TEN MORE, TEN LESS

## GALLERY WALK

*Shelley Gray*

22 Write the number that is ten less than:

8 Write the number that is ten less than:

50 CARDS

20 MORE, 20 LESS

## GALLERY WALK

*Shelley Gray*

8 Write the number that is twenty less than:

11 Write the number that is twenty more than:

16 Write the number that is twenty less than:

50 CARDS

100 MORE, 100 LESS

## GALLERY WALK

*Shelley Gray*

16 Write the number that is one hundred less than:

12 Write the number that is one hundred less than:

five-hundred fifty

6 Write the number that is one hundred less than:

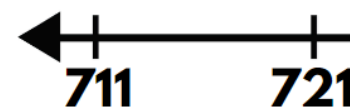
25 CARDS

Looking for a simple, fun way to reinforce number sense?

This bundle of gallery walks reinforces three more or less concepts in a fun way, making them a great activity for any time of the year!

6

**Write the number that is one hundred less than:**



100 More, 100 Less Gallery Walk

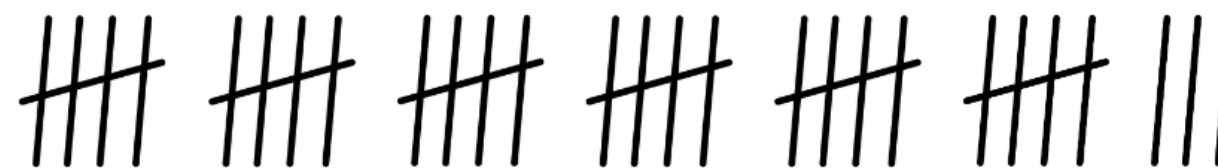
9

**Write the number that is twenty more than:**




3


**Write the number that is ten more than:**



Ten More, Ten Less Gallery Walk



© Shelley Gray



© Shelley Gray

This bundle includes

# THREE GALLERY WALKS

for three more or less number sense concepts!

Use them to meet the needs of each student and provide review throughout the year.

TEN MORE, TEN LESS  
**GALLERY WALK**  
Shelley Gray

22 Write the number that is ten less than:  
eighteen

8 Write the number that is ten less than:  
50

20 MORE, 20 LESS  
**GALLERY WALK**  
Shelley Gray

8 Write the number that is twenty less than:

7 Write the number that is ten more than:

100 MORE, 100 LESS  
**GALLERY WALK**  
Shelley Gray

16 Write the number that is one hundred less than:  
five-hundred fifty

12 Write the number that is one hundred less than:  
50

11 Write the number that is twenty more than:

6 Write the number that is one hundred less than:  
25

50 CARDS


25 CARDS

Get students **up and moving!**

Simply post gallery walk cards around your classroom and have students circulate, answering the questions as they go.

18

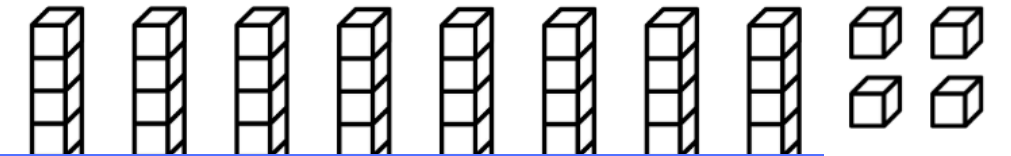
**Write the number that is ten less than:**



Ten More, Ten Less Gallery Walk

2

**Write the number that is twenty less than:**



© Shelley Gray

20

**Write the number that is one hundred less than:**

600 + 222



100 More, 100 Less Gallery Walk

© Shelley Gray

See the complete bundle here.



MORE OR LESS

# GALLERY WALK

*Bundle* Shelley Gray

**TEN MORE, TEN LESS**  
**GALLERY WALK**  
Shelley Gray

22 Write the number that is ten less than:  
eighteen

8 Write the number that is ten more than:  
\_\_\_\_\_

**20 MORE, 20 LESS**  
**GALLERY WALK**  
Shelley Gray

8 Write the number that is twenty less than:  
██████

11 Write the number that is twenty more than:  
██████

**100 MORE, 100 LESS**  
**GALLERY WALK**  
Shelley Gray

16 Write the number that is one hundred less than:  
██████████

12 Write the number that is one hundred less than:  
five-hundred fifty

6 Write the number that is one hundred less than:  
711 721 731 741

**50 CARDS**

**25 CARDS**

**125 CARDS**