

HALLOWEEN

GALLERY WALK

SHELLEY GRAY

24


Suppose that you are planning a Halloween party. Make a list of things you will need.



© Shelley Gray

11

Write a fact family (2 addition equations and 2 subtraction equations) using these numbers:



© Shelley Gray

List two questions that you have about spiders.



© Shelley Gray

GRADES
2-4

Halloween Gallery Walk

Looking for a simple, fun way to add a Halloween twist to teaching essential skills in October?

3

What are three things that you should remember when making a jack-o-lantern?

Halloween Gallery Walk

7


Each house on 4th Avenue has 3 pumpkins. There are 9 houses altogether. How many pumpkins are there

10

Write one Halloween safety tip.

Halloween Gallery Walk

© Shelley Gray



© Shelley Gray



© Shelley Gray

This gallery walk includes 25 cards with a variety of different prompts. Simply post them around your classroom and have students circulate, answering the questions as they go.

13

List the materials that you would need to make costumes



Halloween Gallery Walk

19

If you had to choose one of these costumes for Halloween, which one would you choose? Why?




20

List four ingredients that are in this cauldron:



Halloween Gallery Walk



© Shelley Gray

© Shelley Gray

A recording sheet is included to help your students stay organized.

Halloween Gallery Walk
RECORDING SHEET

Name: _____

CARD #1
1. _____
2. _____
3. _____

CARD #2
The best part of Halloween is _____

CARD #3
1. _____
2. _____
3. _____

CARD #4
1. _____
2. _____

CARD #5

CARD #6
I would rather _____
because _____

CARD #7
There are _____ pumpkins in all.

CARD #8
1. _____
2. _____
3. _____
4. _____
5. _____

CARD #9

CARD #10

CARD #11
____ + ____ = ____
____ + ____ = ____
____ - ____ = ____
____ - ____ = ____

CARD #12
This year on Halloween I am going to _____

CARD #13

Ready to integrate movement and learning into an activity your students will love?

HALLOWEEN

GALLERY WALK

Shelley Gray

4

List two questions that you have about spiders.



Halloween Gallery Walk

11

Write a fact family (2 addition equations and 2 subtraction equations) using these numbers:



24

Suppose that you are planning a Halloween party. Make a list of items that you will need.



25
CARDS