

MATH

LOGIC PROBLEMS

Find the value for each symbol.

$$\begin{array}{c} \text{★} \text{★} \\ \text{★} \end{array} + 10 = \text{🏎️}$$

$$\text{🏎️} + \text{🏎️} + \text{🏎️} = 9$$

$$\text{🔑} \times \begin{array}{c} \text{★} \text{★} \\ \text{★} \end{array} = 1$$

9

Find the value for each symbol.

$$\text{✉️} + \text{✉️} = 32$$

$$\text{🎉} + \text{🎉} - \text{🎈} = 20$$

$$5 \times \text{✉️} = \text{🎈}$$

1

© Shelley Gray

GRADES
4-6

SHELLEY GRAY

Ready to
challenge
your students in a new way?

These Logic Puzzles will require
your students to think differently,
providing a whole new element
of challenge!



Find the value for each symbol.

$$\text{Steering Wheel} \times \text{Steering Wheel} = 64$$

$$\text{Helmet} + \text{Helmet} + \text{Stopwatch} = 80$$

Find the value for each symbol.

$$\text{Airplane Stamp} + \text{Airplane Stamp} = 42$$

$$\text{Ship} \times \text{Ship} = 36$$

$$\text{Ship} + \text{Ship} = 70$$










































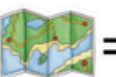












Requires
critical
thinking!

This set includes
20 logic puzzles
that focus on addition,
subtraction, and multiplication.



But don't be fooled! These puzzles
are trickier than they look!



A recording sheet is included to
make student organization simple.




RECORDING SHEET (Addition, Subtraction, and Multiplication Within 100)


1  =  =  =	2  =  =  =	3  =  =  =	4  =  =  =
5  =  =  =	6  =  =  =	7  =  =  =	
9  =  =  =	10  =  =  =	11  =  =  =	
13  =  =  =	14  =  =  =	15  =  =  =	16  =  =  =
17  =  =  =	18  =  =  =	19  =  =  =	20  =  =  =

Find the value for each symbol.

 +  = 42

 ×  = 36

 +  +  = 70

19
 =

Ideas for Use



Morning Tubs



Math Centers



Early Finisher Activity



Around the Room Gallery Walk

Tip:

Let your students
work in partners and
listen to the amazing
math conversation
that occurs!

Find the value for each symbol.

$$\begin{array}{rcl} \text{Envelope} & + & \text{Envelope} = 32 \\ \text{Party Hat} & + & \text{Party Hat} - \text{Balloon} = 20 \\ 5 \times \text{Envelope} & = & \text{Balloon} \end{array}$$

1

© Shelley Gray

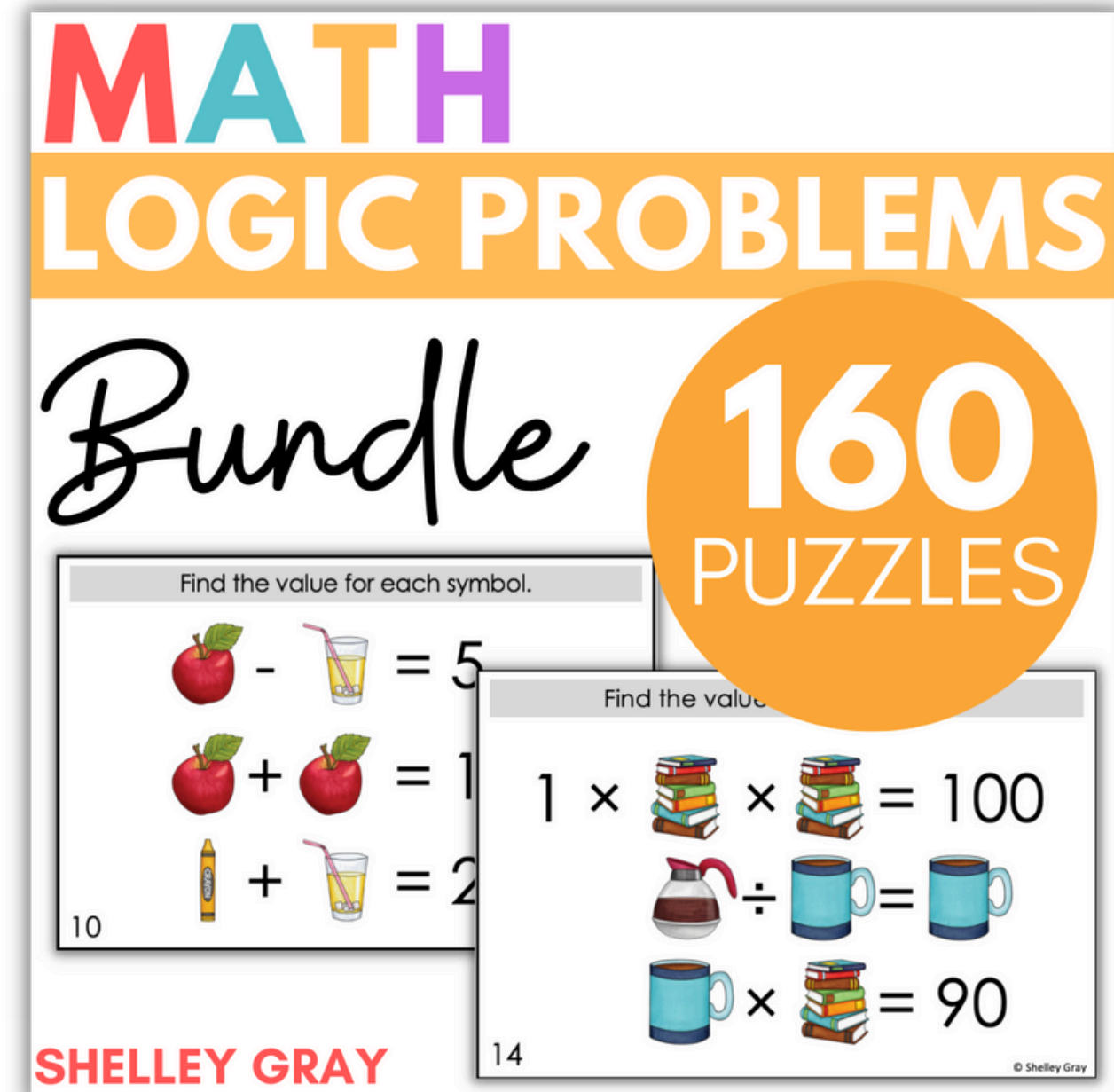
Along with the printable version, this resource also includes a Google Slides version – perfect for projecting in your classroom.

Use it as a math warm-up, daily challenge, or thinking task to promote deep and critical thinking.

Try using differentiated puzzles to provide a "just right" challenge for all your students.

This bundle includes 160 logic puzzles at 8 different levels!

Try letting students choose the set that challenges them perfectly to increase their metacognition and encourage them to take responsibility for their own learning!



Differentiate to all your students with the Logic Puzzle Bundle HERE.